


Name: _____ Date: _____

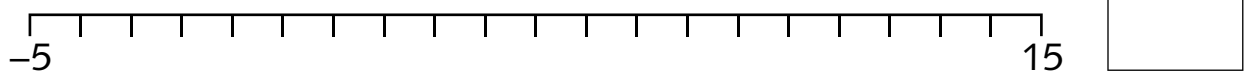
Using negative number lines



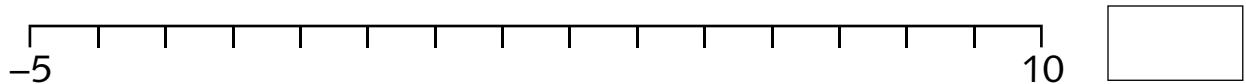
Solve negative number problems

Use the number lines to work out these problems.

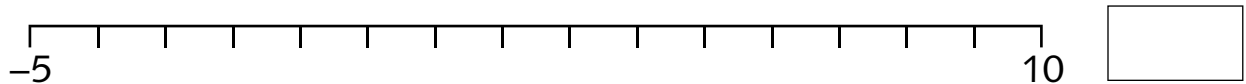
- 1 The temperature in Chicago is -4°C and in Amsterdam it is 12°C . How much warmer is it in Amsterdam than in Chicago?



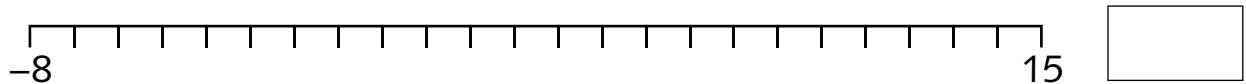
- 2 Lilly likes to check the temperature throughout the day. At 7:00 a.m. when she got up it was -2°C . She looked again when she got home from school and the temperature had risen by 14°C . What was the new temperature?



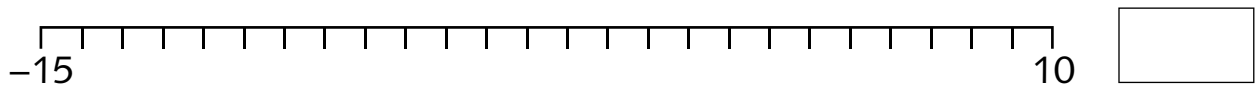
- 3 The daytime temperature in Glasgow was 7°C . But by midnight the temperature had dropped by 11°C . What was the temperature at midnight?



- 4 Joe had $\pounds 14$ in the bank. Unfortunately he lost his scarf and had to buy another one, which cost him $\pounds 21$. This took his bank balance into negative numbers. What is his bank balance now?



- 5 Rachel's money balance was $-\pounds 13$ as she spent too much on her new trainers. Then she earned $\pounds 20$ for babysitting. What is her new money balance?



- 6 Omar had $\pounds 7$ in his bank account. His bike needed fixing and this cost him $\pounds 12$. What is his bank balance now?

