

Name: _____ Date: _____

On reflection

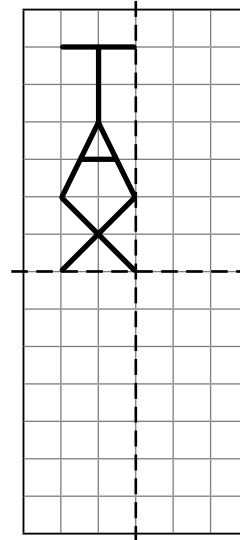
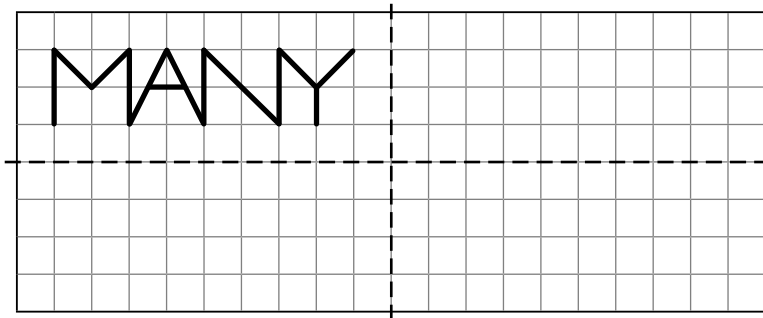
Recognise where a shape will be after reflection in two lines of symmetry

You will need:

- ruler

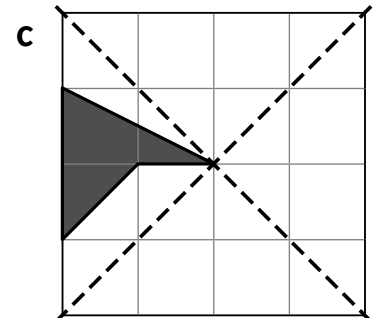
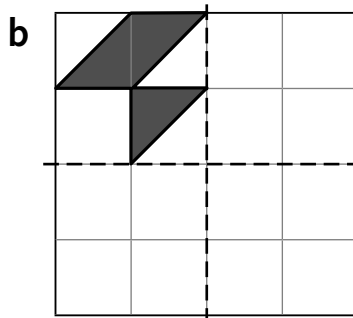
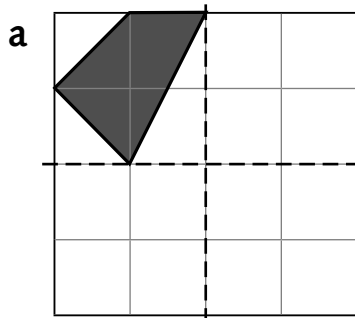
Challenges
1, 2, 3

Reflect each word in both lines of symmetry.



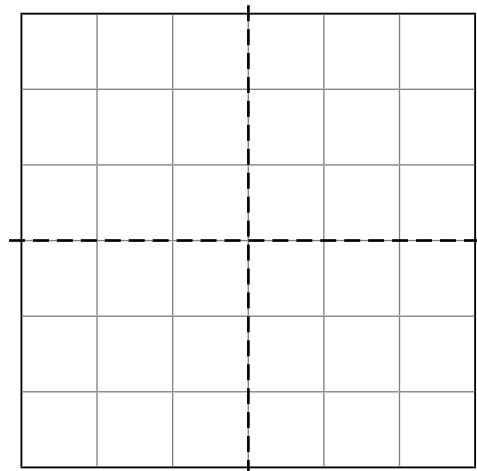
Challenges
2, 3

Complete each pattern by reflecting the shape in both lines of symmetry.



Challenge
3

Design your own pattern. Draw a shape in the top left section of the grid. Then reflect it in both lines of symmetry.



Find which capital letters are unchanged by reflection in a vertical line of symmetry, a horizontal line of symmetry, and in both lines of symmetry. Draw them on the back of this sheet.